





Test #1 Continued

5. Carly drew the four cards shown below. What is the greatest possible number that can be made with the cards if each card is used only once?



a. 9,851

b. 9,815

c. 8,951

d. 1,589

6. What is $1,000 + 500 + 60 + 9 =$ _____

a. 1,569

b. 1,596

c. 1,659

d. 5,169

7. Which number has a seven in the tens place?

a. 2,367

b. 4,736

c. 5,673

d. 7,863

8. The Science Club collected 840 cans to recycle. The members put them in groups of ten. How can you make 840 using only tens?

a. 40 tens

b. 50 tens

c. 80 tens

d. 84 tens