

Name _____ Date _____

Chapter 6 Test

Time

TELLS TIME TO THE HOUR AND HALF HOUR.

I can identify the hour hand and the minute hand.

1. Answer the questions about the clock below.




The hour hand is pointing to the _____.

The minute hand is pointing to the _____.

It is _____ o'clock.

I can write time to the hour.


2. Write the digital time to match the clock below.



3. Write the digital time to match the clock below.



4. Write the digital time to match the clock below.

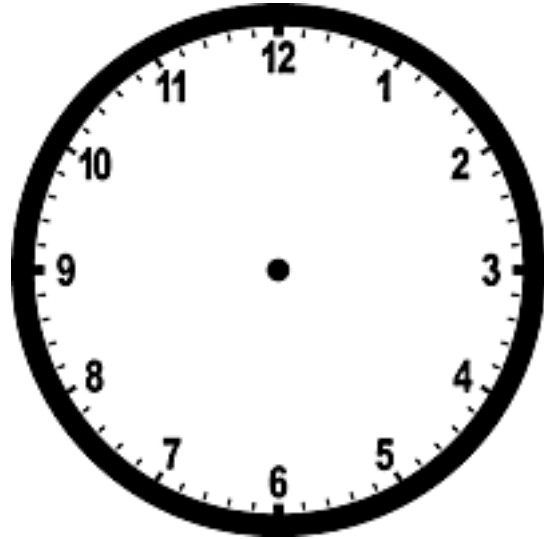


5. Write the digital time to match the clock below.



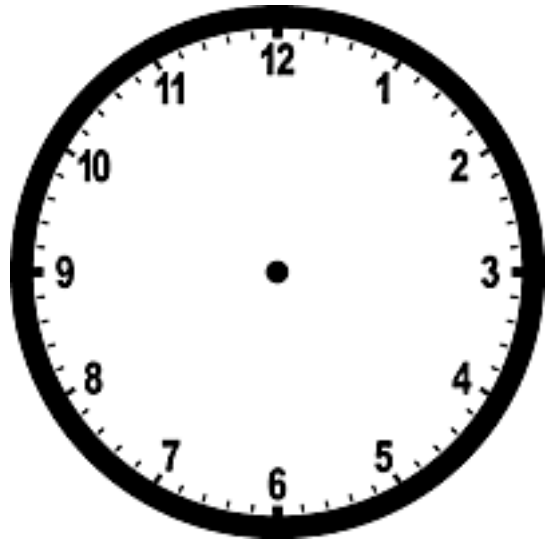
6. Draw the hands on the clock to match the digital time.

10:00




7. Draw the hands on the clock to match the digital time.

2:00



I can name write time to the half hour.

8. It is time for Sam to feed his fish.
What time does the clock show?



:



9. Circle the clock that shows the same time.

3:30




10. Write the digital time to match the clock below.




⋮


10. Write the digital time to match the clock below.



11. Draw the hands on the clock to match the digital time.



12. Draw the hands on the clock to match the digital time.




I can tell if an event happens
in the morning, afternoon or night.

13. What time of day does this happen? ☆

morning

afternoon

night




14. What time of day does this happen?

morning

afternoon

night



I can name the days of the week.

15. Circle the day that comes after **Thursday**.

Sunday Monday Tuesday Wednesday Thursday Friday Saturday

16. What day of the week is October 4 on this calendar?

October

Sunday

Friday

Saturday

Thursday

I can use a calendar to answer questions.

17. Which month comes before June?

Sunday	Monday	Tuesday	Wednesday	Thursday	Friday	Saturday
		1	2	3	4	5
6	7	8	9	10	11	12
13	14	15	16	17	18	19
20	21	22	23	24	25	26
27	28	29	30	31		

I can read and order the months of the year.

18. Circle the month that comes in between July and September.

January

February

March

April

May

June

July

August

September

October

November

December

19. Circle the month that comes before May.

January

February

March

April

May

June

July

August

September

October

November

December